

Summer Vacation

**Guru Tegh Bahadur
3rd Centenary Public School**

**Holiday
Homework
CLASS I**



SUMMER VACATION

Dear Parents,

- ❖ Long awaited Summer Holidays have commenced. It is a time to relax, rejuvenate, refresh and regain health. It is also a time to reduce stress & increase productivity.
- ❖ Spend quality time with your kids and inculcate values.
- ❖ Help and guide your ward in doing Holiday Homework.
- ❖ Ask him/her to help you in doing household work.
- ❖ Ask your ward to spend time with Grandparents and click pictures.
- ❖ Motivate your ward to look after and water the plants.
- ❖ Keep your children away from T.V., Mobile, Computer and Electric gadgets.
- ❖ Encourage your ward to converse in English.
- ❖ Do some kind of physical exercises with your kids. As a parent, it is important to spend quality time with them.
- ❖ Read the Newspaper every day and encourage your ward to do so.
- ❖ Pray together with family, every day, and give thanks to God for all HIS BLESSINGS.

BE HEALTHY, BE HAPPY

Regards

GTB-011-46575555

Guru Tegh Bahadur 3rd Centenary Public School

C-Block, Mansarover Garden New Delhi- 110018

Summer Holiday Homework (2026-27)

Class – I

General Instructions

1. Read all the lessons done in the class.
2. Revise all the work done in the book and note book.
3. Complete and revise all the worksheets of each subjects
4. Prepare well for First Monthly Test to be held in July.
5. A creative work has been given in each subject .Each child is supposed to do the project according to their Roll No.
6. Learn short poem in Hindi for Hindi kavita Vaachan Pratiyogita to be held in July.

English

1. Learn spellings of difficult words from the note book .
2. Learn the poem ‘Baby Beds’
3. Reading and Recitation test will be conducted during the First Monthly Test.

Creative Work :- (For Roll No.1 to 5) A wall hanging on Moral Values.

Book Mark (Roll No. 6 to 10)

Hindi

कविता: **पानी बरसा** याद करो

पृष्ठ 21 & 27 पढ़ो

अ, आ, इ, ई, की मात्रा की पुनरावृत्ति करो ।

बच्चों की हिन्दी कविता वाचन प्रतियोगिता जुलाई के आखरी सप्ताह मे होगी, तैयारी करवाए ।

गतिविधियाँ (Roll No.7 to 12) शब्द लडी बनाओ

Mathematics

1. Learn table of “2”in dodging format.

Creative Work (Roll No: - 13 to 18) Pen stand using waste materials

(Roll No: - 19 to 26) Make a wall hanging of different kinds of shapes

Environmental Studies

1. Read and revise all the lessons done in the class.

Creative Work:- **A collage on A4 size sheet** for the following work

(Roll No:- 1 to 6) Heroes of discovery

(Roll No:- 7 to 12) Naya Bharat

(Roll No:- 13 to 20) Janmashtami

(Roll No:- 21 to 27) Let Goodness Prevail

Computer

1. Paste the Pictures of “Uses of Computer” in computer notebook.
2. Revise lesson -1, 8 forthcoming **Oral** Monthly Test-1
3. Paste Revision Assignment in Computer Notebook.

DIVINITY

1. Learn 5 Pauries of Japaji Sahib Path
2. Names of Ten Guru's, Four Sahibjada's, five piyaras

Questions:

Q1. What is the Jaikara of Sikhs?

Ans. “Bole So Nihal, Sat Sri Akal”

Q2. Who was the founder of Sikhism?

Ans. Guru Nanak Dev Ji

Q3. Who established Khalsa Panth?

Ans. Guru Gobind Singh Ji.

Q4. Who was the mother of Khalsa?

Ans. Mata Sahib Kaur Ji

Q5. Who was the Father of Khalsa?

Ans. Guru Gobind Singh Ji

HAPPY HOLIDAYS

Holidays Homework Worksheet

Class I

English Revision

Assignment: 1

Name: _____

Class & Sec. _____

Roll No. _____

Q1. Write a or an in front of each word.

1. _____ boot
2. _____ ear
3. _____ orange
4. _____ nose
5. _____ ice-cream
6. _____ fox

Q2. Write the plural form of each noun given in the bracket and complete the sentences

- a. This cat has many _____ .(kitten)
- b. Fill all these _____ (bottle)
- c. Colour all the _____(tree) green
- d. Read all the _____ (page)
- e. Keep your _____ (book) clean.

Q3. Answer the following questions.

Q1. Where were the children playing?

Ans. _____

Q2. Who was inside the house?

Ans. _____

Q4. Rewrite the following sentences using capital letter and full stop.

1. i am a good child

2. ram is going to school

3.my mother is my best friend

4.the shop is closed

Q5. Write 4 sentences on “ My Favourite Fruit”. Draw and colour the fruit.

1. _____

2. _____

3. _____

4. _____

Q6. Underline nouns in the following sentences

1. Go to school now.

2. Close the door

3. Give the keys

4. Mother is tired

5. Please close the gate.

6. Ram is sleeping.

7. Give this red balloon.

Assignment: 2


Subject: English Revision

Name: _____

Class & Sec. _____

Roll No. _____

Q1. Write the colour of the following objects.



Q2. Look at the following pictures and write if the noun is a person, place or thing.

1.



2.



3.



4.



5.



6.



Q4. Answer the following questions

Q1. What is Raja doing?

Ans.1 _____

Q2. What is Neha doing?

Ans2. _____

Q3. Where is Rani hiding?

Ans3. _____

Q5. Fill in the blanks

1. Mary is brushing _____ .

2. Jeet is _____ the plants.

3. _____ is licking the ice- cream.

4. Salma is _____ with balloons.

Q6. Fill the blanks with double letter words (oo,ll,ee)

• B A _ _ O O N

• L _ _ _ K

• T R _ _ _

• D O _ _ _

• S H _ _ _ P

• T A _ _ _

• B _ _ _ K

• C _ _ _ L

• B E _ _ _

• D _ _ _ P

Q7. Write the name of 5 colours and draw things of the same colour. (2 each)

Assignment-1

Subject: Environmental Studies

Name _____.

Roll No. _____

Q1) Fill in the blanks with the words from the help box.

(eyes, body, ears, hands,)

- 1) Our _____ has many parts.
- 2) Wash your _____ before and after eating.
- 3) We have two _____ and two _____

Q2) Write True or False for the following statements.

- 1) Our eyes help us to see. ()
- 2) Our tongue helps us to feel. ()
- 3) We eat three meals in a day. ()
- 4) Eating pizza makes us healthy . ()
- 5) We should never waste food. ()

Q3) Match the following

- | | |
|--------------|-----------|
| 1) Breakfast | afternoon |
| 2) Lunch | night |
| 3) Dinner | morning |

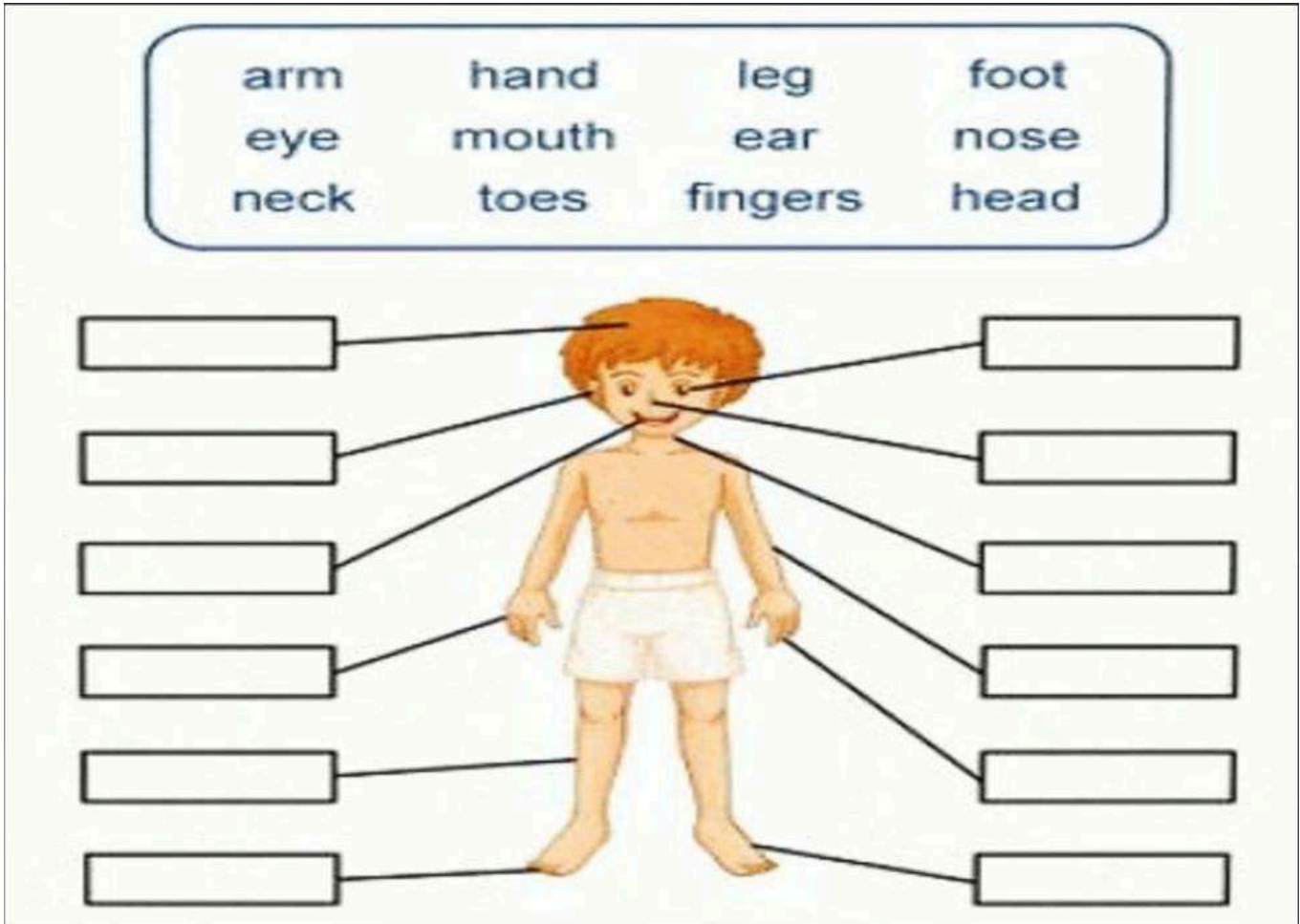
Q4) Answer the following questions

Q1. Why do we need food ?

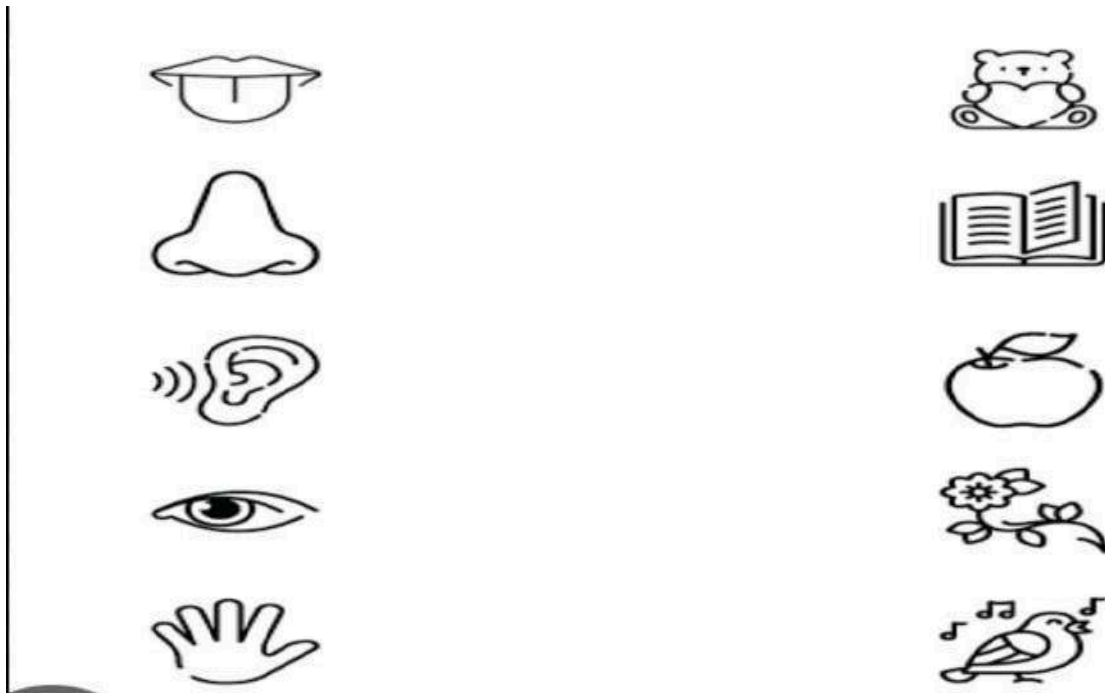
Ans.

Q2. Where do we get food from?

Q5) Label the parts of the body below:



Q6. Match the following sense organs and their functions .



Q7. Give Examples (two each)

1. Food which gives us energy

_____ , _____

2. Food which helps you to grow.

_____ , _____

- 3 Uses of legs

_____ , _____

4. Milk products

_____ , _____

5. Uses of hands

_____ , _____

Q8. Draw

- A) Two body parts which are in pair

- b) Things used to keep ourselves clean (draw 4)

Subject: Environmental Studies

Assignment- 2

Name: _____ Sec _____ Roll No. _____

Q1) Fill in the blanks with the words given in the help box.

(protect, brush, woollen , exercise, rest)

- 1) We wear clothes to _____ our body
- 2) _____ clothes keep us warm.
- 3) We must _____ our teeth everyday .
- 4) We must _____ when we feel tired.
- 5) We must _____ every day.

Q2) Write True or False for the following statements.

- 1) Clothes keep us healthy ()
- 2) We get wool from cotton plant. ()
- 3) We should use a clean towel to wipe ourselves. ()
- 4) We must cut our nails when they grow big. ()
- 5) We must not eat healthy food. ()

Q3) Answer the following questions

Q1. Why do we wear clothes?

Ans1. _____

Q2 How can we stay healthy.?

Ans2 _____

Q4. Give examples.(Two Each)

a. Clothes worn in summer .









b. Clothes worn in winter.

c. Things used during the rainy season.











d. People who wear uniforms.

e. Things used to keep yourself clean.

Q5. Write the names of the following pictures.

Hat t-shirt shoes jeans skirt dress gloves sandals			
			
			

Q6. Match the following.

Q9. Match the picture with the correct statement.



I wash my hands.

I take a shower.



I brush my teeth.

I comb my hair.



I wear clean clothes.

I wash my hands.



I comb my hair.

I brush my teeth.




I wear clean clothes.

I take a shower.

Q10. Draw 2 things used during rainy season

Name: _____

प्रश्न 2: शब्द लिख कर वाक्य पूरे करो



सलमा _____

खा।

नगमा _____

पहन।



बरखा _____

पकड़।

रचना _____

मत बजा।



राम _____

जला



रमन अपना _____

पकड़

प्रश्न 3: फलों के नाम लिखो

1 _____

4 _____


2 _____

5 _____

3 _____

6 _____

प्रश्न 1: नीचे दिए चित्रों को देखकर नाम लिखो:



प्रश्न 4: चित्रों का मिलान करो:



टिकट



सितार



विमान



दिमाग



किशमिश



मकड़ी



कली



चाबी



दिन



बकरी

प्रश्न 5 : आ ,इ, ई की सही मात्रा लगाओ

आरति _____	अम _____	इमलि _____
कीशमिश _____	अश्रम _____	नदि _____
ततल _____	चन _____	वीमन _____
गटार _____	किसन _____	असन _____
मछलि _____	गीलहरी _____	मठाइ _____
खिरा _____	किताब _____	चिडीया _____
हीरन _____	हथ _____	गीलस _____

प्रश्न 6: नीचे दिए शब्दों से वाक्य बनाओ:

पपीता -----

माला -----

गिटार -----

मकड़ी -----

मिठाई -----

प्रश्न 7: नीचे दिए शब्दों सही मात्रा में लिखें

लाल, किसान, बिल, मछली, रात, बकरी, दिल, आफत, लिहाफ दादी, टिकट, आप, लड़की, बरखा, गिटार, पानी,

आ -----

इ -----

ई -----

Name: _____

प्रश्न 1: नीचे दिए खाली स्थान में इ व ई की मात्रा के शब्द लिख कर खाली स्थान भरो



चि या



तित



बा श



धर



सान



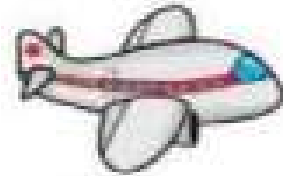
न



ठाई



सी



मान

प्रश्न 2: चित्र मिलान करो

1 अखबार

2 छिलका

3 पहिया



4 महल

5 गाजर

6 हलवा


7 उपहार

8 आम



प्रश्न 3: खाली स्थान भरकर वाक्य पूरे करो :

राधा पढ़ ।



..... का शिकार मत कर ।



..... चला ।



..... इधर रख ।



राधा मत पकड़ ।



..... खाट पर रख ।



प्रश्न 4: सब्जियों के नाम लिखो:

1 _____

4 _____

2 _____

5 _____

3 _____

6 _____

प्रश्न 5: नीचे दिए वर्णों को जोड़ कर नए शब्द बनाओ:

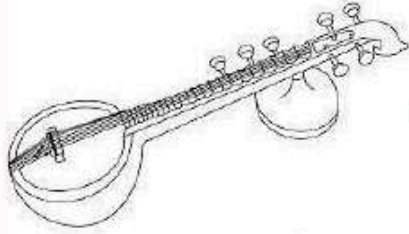
न + ल =	त + ल + ल + ल =
ब + स =	क + न + म =
घ + र =	छ + त + त + त =
फ + ल =	श + त + न + त =
ज + य =	ब + ज + त =
म + ट + र =	पि + ह + र + न =
क + त + ख =	पि + ग + न =
ब + ट + स =	पि + स + या + र =
म + ठ + ल =	पि + च + पि + ड + या =
क + म + ल =	पि + म + ला =
क + स + र + त =	म + छ + ल + ती =
श + ल + ग + म =	झ + ती + ल =
श + र + ब + त =	स + ती + ट + ती =
ध + र + म + स =	ज + ती + ल =
अ + च + क + स =	ख + ती + र =


प्रश्न 6.


चित्र पहचान कर शब्द लिखो और चित्रों में रंग भरो

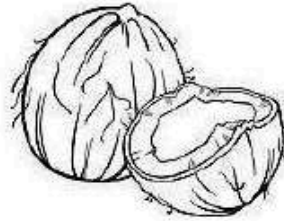






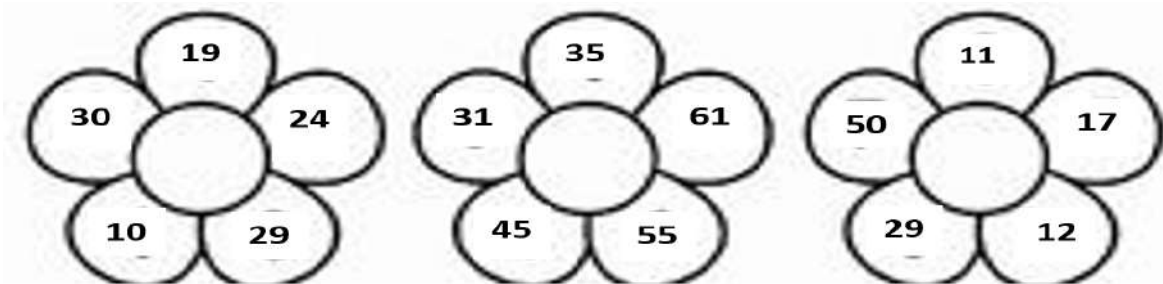




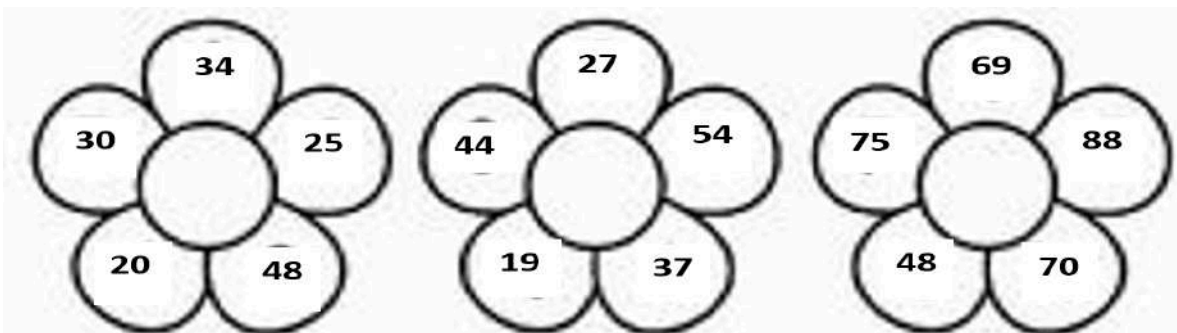


Name: _____


Q1) Circle the biggest number.



Q2) Circle the smallest number.



Q3) Count the objects and compare using symbols $>$, $<$ or $=$.



Q4) Put the sign >, < or =.

1. 2 ○ 6

6. 4 ○ 20

2. 8 ○ 2

7. 16 ○ 12

3. 17 ○ 14

8. 18 ○ 19

4. 10 ○ 9

9. 6 ○ 5

5. 1 ○ 11

10. 3 ○ 13

Q6) Fill in the blanks:-

a) 2 x 6 = _____

b) 2 x 9 = _____

c) 2 x 2 = _____

d) 2 x 4 = _____

e) 2 x 5 = _____


Q7) Fill in the blanks with the missing numbers:-

31, _____, 33, _____, 35, _____

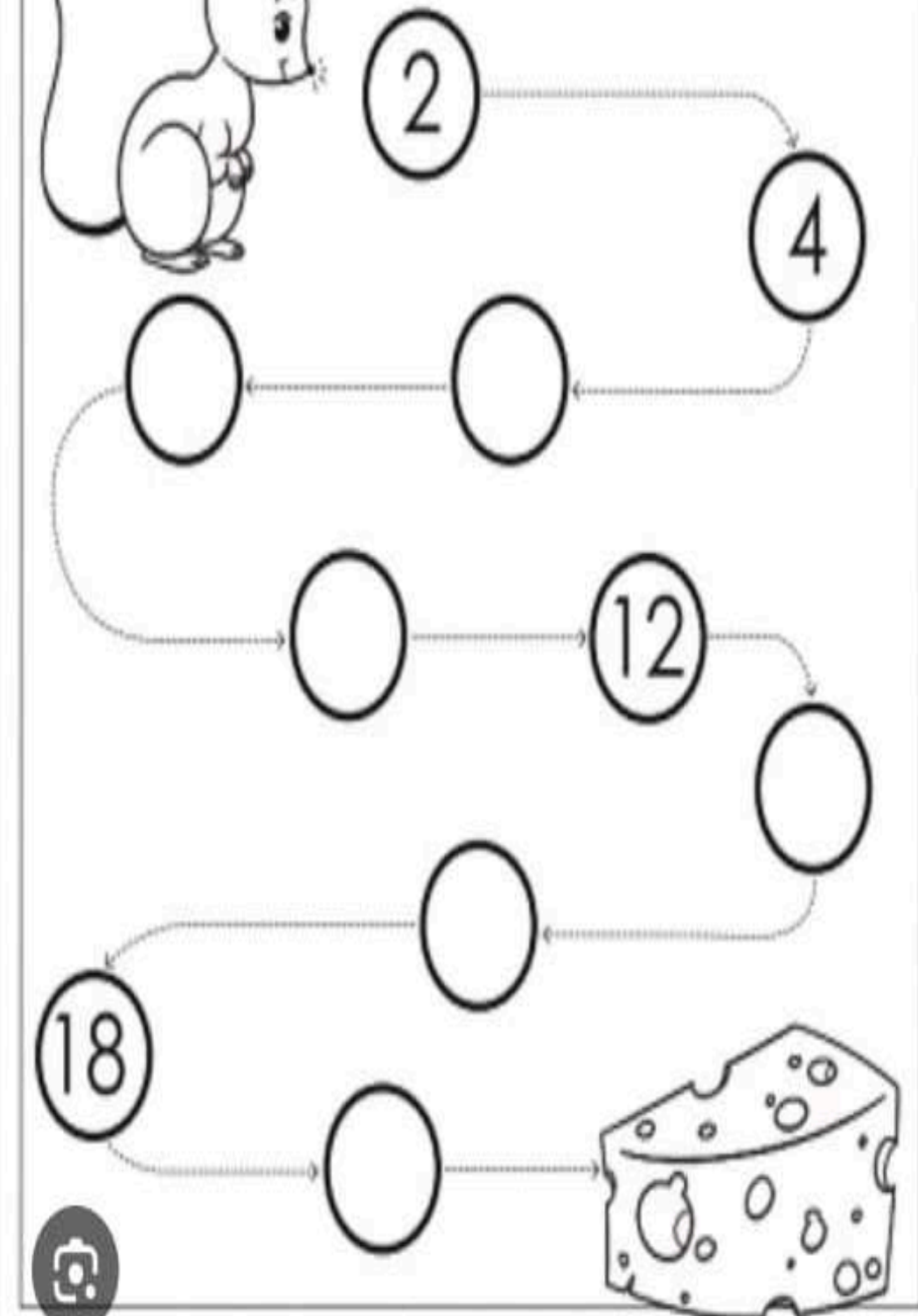
27, _____, _____, 30

39, _____, 41, _____, _____, 44

The Skip Counting Mouse



Help the mouse find the cheese.
Count by 2s. Fill in the missing numbers.



Q9. Write number names

11- _____

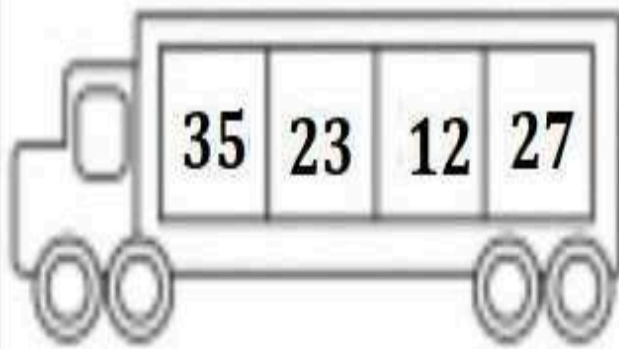

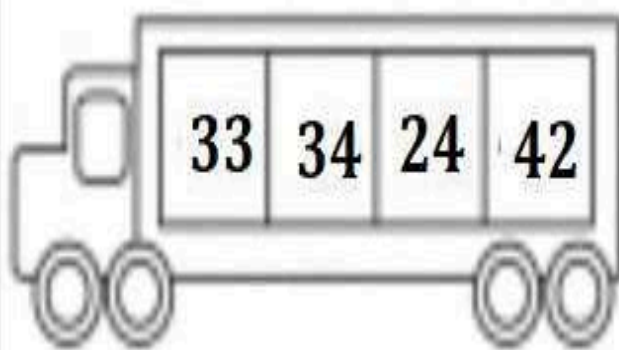

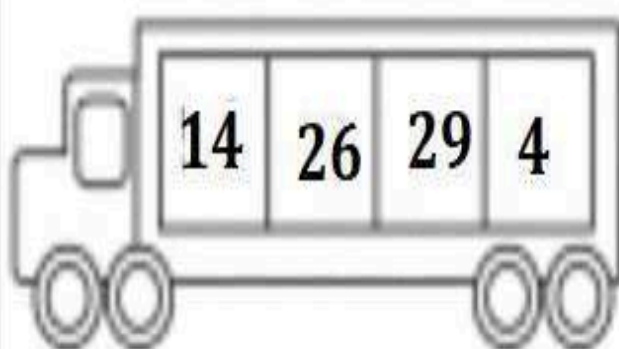

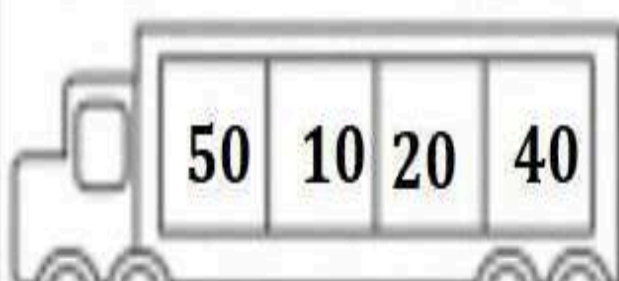

13- _____

18- _____

15- _____

12- _____

Q10 Arrange the numbers in ascending order. (Smallest to biggest)

Name: _____

Q1) a) What comes after?

- 1) 32 _____
- 2) 35 _____
- 3) 16 _____
- 4) 29 _____
- 5) 10 _____

b) What comes before?

- 1) _____ 31
- 2) _____ 43
- 3) _____ 20
- 4) _____ 11
- 5) _____ 50





c) What comes in between?





- 1) 48 _____ 50
- 2) 37 _____ 39
- 3) 13 _____ 15
- 4) 21 _____ 23
- 5) 29 _____ 31





Q2) Write the number names of the following numbers

- a) 10- _____
- b) 7 - _____
- c) 18- _____
- d) 14- _____
- e) 9- _____
- f) 20- _____
- g) 11- _____









Q3) Add and write the correct number of objects

 	 
$5 + 4 = \dots\dots$	$3 + 2 = \dots\dots$

 	 
$5 + 3 = \dots\dots$	$2 + 4 = \dots\dots$

 	 
$6 + 4 = \dots\dots$	$3 + 4 = \dots\dots$

Q4) Add the following

<p>1. $\begin{array}{r} 4 \\ + 2 \\ \hline \end{array}$  </p>	<p>2. $\begin{array}{r} 6 \\ + 1 \\ \hline \end{array}$  </p>
<p>3. $\begin{array}{r} 5 \\ + 2 \\ \hline \end{array}$  </p>	<p>4. $\begin{array}{r} 3 \\ + 3 \\ \hline \end{array}$  </p>

Q5) Fill in the blanks

- | | | |
|-----------------|----|--------------|
| 1) $2+5=$ _____ | so | $5+2=$ _____ |
| 2) $3+1=$ _____ | so | $1+3=$ _____ |
| 3) $8+0=$ _____ | so | $0+8=$ _____ |
| 4) $4+5=$ _____ | so | $5+4=$ _____ |

Q6) Add

$$\begin{array}{r} 1) \quad 8 \\ + \quad 1 \\ \hline \\ \hline \end{array}$$

$$\begin{array}{r} 2) \quad 4 \\ + \quad 1 \\ \hline \\ \hline \end{array}$$



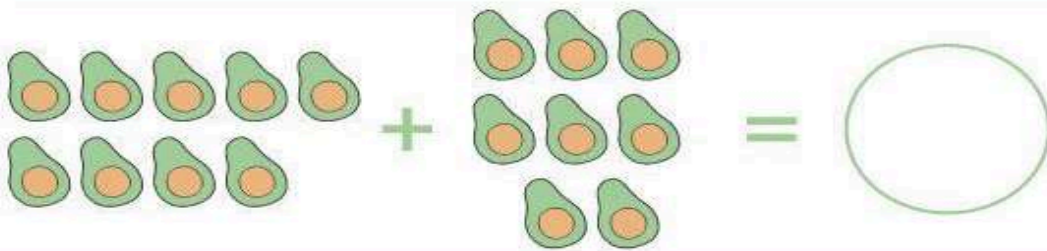

$$\begin{array}{r} 3) \quad 3 \\ + \quad 2 \\ \hline \\ \hline \end{array}$$

$$\begin{array}{r} 4) \quad 6 \\ + \quad 3 \\ \hline \\ \hline \end{array}$$

$$\begin{array}{r} 5) \quad 3 \\ + \quad 4 \\ \hline \\ \hline \end{array}$$

$$\begin{array}{r} 6) \quad 3 \\ + \quad 1 \\ \hline \\ \hline \end{array}$$

Q7) Add



Class-1

General Knowledge Questions

Q1. How many colours are there in a rainbow?

Ans1. SEVEN

Q2. Which animal is called the “King of the Jungle”?

Ans2. Lion

Q3. How many days are there in a week?

Ans.3 Seven

Monday, Tuesday, Wednesday, Thursday, Friday, Saturday, Sunday

Q4. Identify the stories

A) Thirsty Crow



B) Lion and the Mouse



Q5. How many alphabets are there in the English language ?

Ans. 26

Q6. How many teeth does a person have?

Ans. 32

Q7. What comes up when rain comes down?

Ans.7 Umbrella

Q8.What is the National Anthem of India?

Ans. Jana Gana Mana

Q9.What is the National Song of India?

Ans. Vande Mataram

Q10.Look at the musical instruments and learn them

1.Harmonium



2.Tabla



3.Guitar



4.Violin



5.Trumpet



6.Piano



Q11. Look at the pictures given below and learn the name of the sports associated with it.

1. Badminton



2. Hockey



3. Basket ball



4. Football



5. Boxing

